

CHEM 527

Final exam, Fall 2004

NAME KEY

NOTES:

1. Please stay calm.
2. Where appropriate, show work to receive full credit.
3. This exam contains 10 pages + metabolic charts (*detach gently, please*).
4. Pace yourself - you may want to do the easiest questions first.
5. Note the point value of questions varies widely - adjust your answers accordingly.
6. Please give concise answers - if there isn't much space allotted - a short answer is appropriate.
7. Questions may have more data than needed to tackle the problem.
8. PLEASE write clearly. If I cannot read it it is wrong.
9. As mentioned in class and EMail, you are allowed to refer to a single piece of 8.5 x 11" paper during this exam. It can feature any material distributed over both sides.

Fix 2c

4g or ATP equiv

Question 1 (14 pts) Yield of ATP. In the space provided give the yield of ATP (or equivalent e.g. GTP) that would be formed in the following processes:

a. per molecule of 1,3-diphosphoglycerate completely oxidized to CO_2 & H_2O

~~14.5~~ 14.5

b. per citrate in the presence of arsenite

2.5

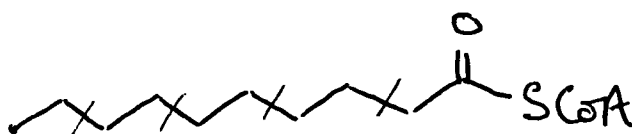
c. per molecule of dihydroxyacetone phosphate converted to ethanol

2

d. per molecule of lactate completely oxidized to CO_2 and water

14

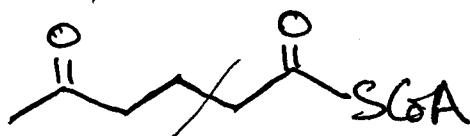
e. per



$4 \times 4 = 16$
 $5 \times 10 = 50$
 to CO_2 and water

66

f. per



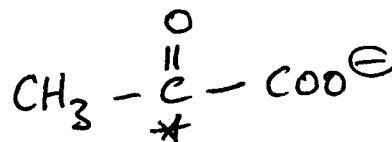
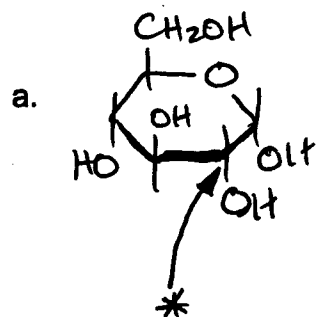
1 turn = 4
 3 acetyl = 30
 to CO_2 and water

34

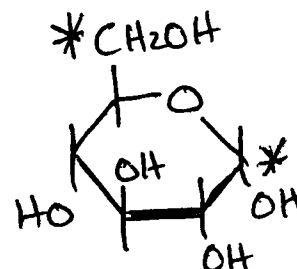
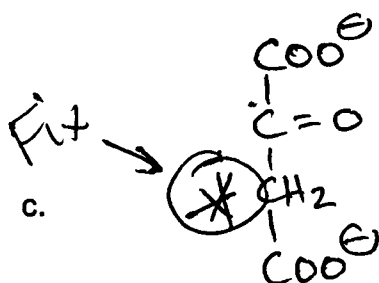
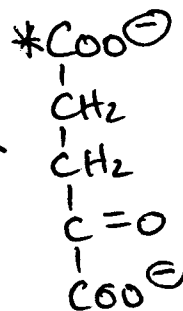
g. per molecule of acetic acid (acetate) oxidized to CO_2 and water

8

Question 2 (6 pts) Tracing radiolabels. Place asterisks indicating the position of the radiolabel in the molecules shown to the right – if the product contains no radiolabel write "NONE".

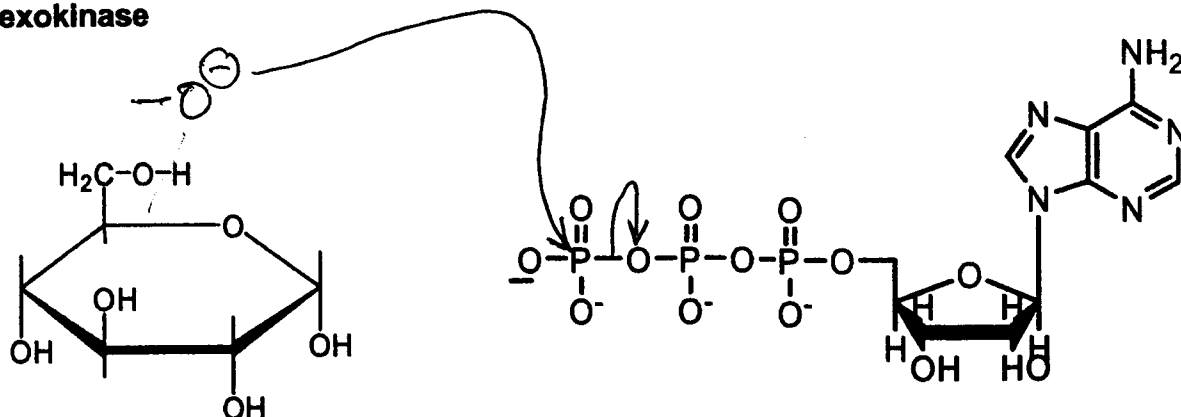


b.

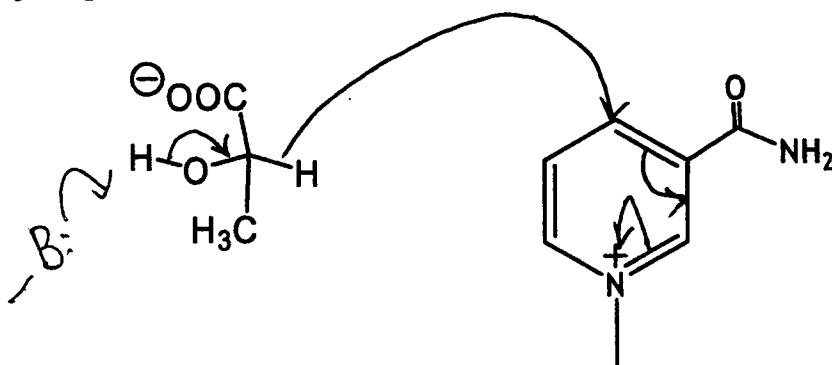


Question 3 (9 pts) Fill in the initial series of curved arrows that start the reactions of the following enzymes. The curved arrows should make chemical sense. Don't draw any more structures. (If you need to deprotonate something, draw the deprotonated group to the side.)

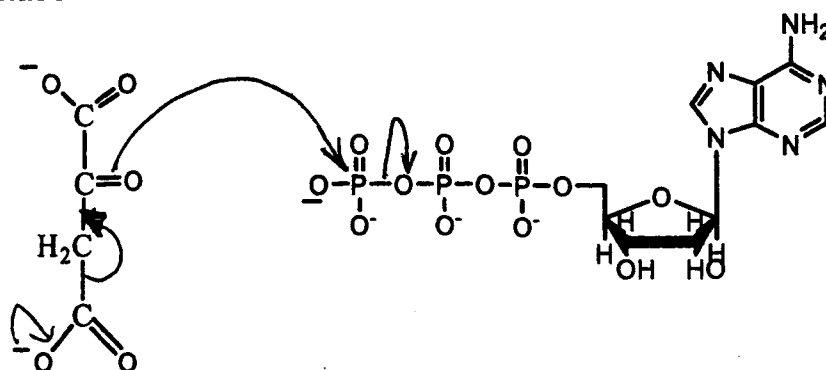
a. hexokinase



b. lactate dehydrogenase



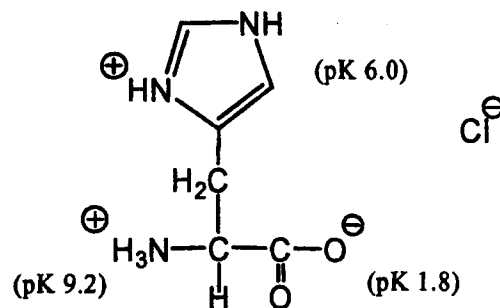

c. PEP carboxykinase



Question 4 (16 pts) Place in the space provided a single number from 0 – 18. Do not put enzyme or substrate product names.

- Transamination of glutamic acid gives what TCA cycle intermediate 3
- The synthesis of UDP-glucose from glucose costs the equivalent of how many molecules of ATP 2
- The complete oxidation of lactate generates how many PAIRS of electrons 6
- How many phosphorus atoms does one CoA molecule have 3
- This intermediate in the TCA cycle is a substrate for complex II in the electron transport chain 5
- How many ATPs would you need to make one molecule of glucose from phosphoenolpyruvate 2
- How many ATPs ^{or equiv} would you need to make one molecule of glucose from oxaloacetate 4
- The number of electrons required to reduce one oxygen molecule to water 4

Question 5 (6 pts) The structure of one form of histidine is shown at the right.



You have 0.7 moles of histidine in the form shown above. How much KOH in moles do you need to take the original 0.7 moles to a pH of:

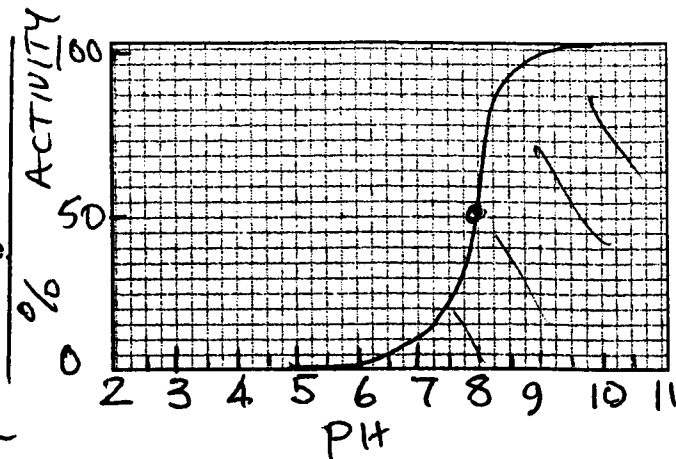
3.9 0

6.0 0.35

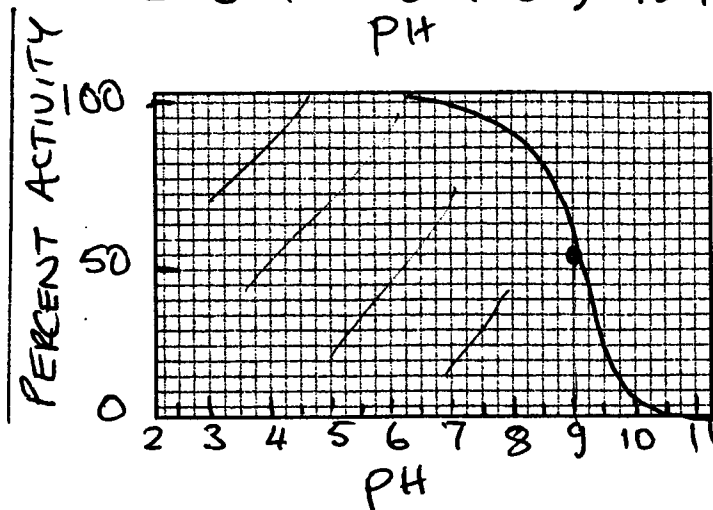

9.2 1.05

Question 6 (6 pts) Graphs. Draw clear accurate graphs to describe the behavior of the following systems. Clarity and accuracy rewarded.

a. only this form of the enzyme show below is active. Show its pH dependence at the right.

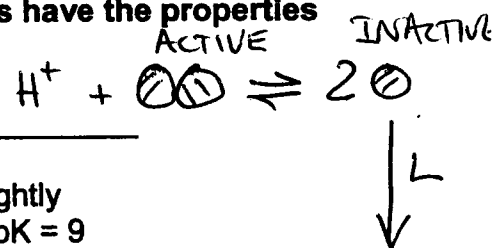


b. only this form of the enzyme show below is active. Show its pH dependence at the right.



Question 7 (5 pts.) The following hypothetical enzyme exists as an equilibrium between an active dimer and two inactive monomers. Monomers and dimers have the properties listed below.

DIMER	MONOMER
active binds L weakly histidine pK = 6	inactive binds L tightly histidine pK = 9



Circle the effect of increasing on the

- | | | | |
|---|----------|-----------|----------|
| a. L on the enzyme activity | increase | no change | decrease |
| b. pH on the amount of monomer | increase | no change | decrease |
| c. protein concentration on enzyme activity | increase | no change | decrease |
| d. $[H^+]$ on enzyme activity | increase | no change | decrease |
| e. pH on the binding of L | increase | no change | decrease |

Question 8 (21 pts). Short problems. Most credit goes for the correct answer.

- a. Aspirin (pK 3.5), a weak carboxylic acid, is dissolved in water to give a solution with a pH of 3.5. What is the proton concentration?

$$\text{pH} = 3.5 \quad \therefore \text{H}^+ = 10^{-3.5}$$

$$3.16 \times 10^{-4} \text{ M}$$

- b. You add 0.22 moles of KOH to 0.8 L of 0.4 M formic acid (pK 3.7). What is the pH of the mixture?

$$0.8 \text{ L} \times 0.4 \text{ mol/L} = 0.32 \text{ moles}$$

$$0.22 \text{ moles KOH} +$$

$$\frac{0.22 \text{ A}^-}{0.1 \text{ HA}}$$

$$\text{So pH} = 3.7 + \log\left(\frac{0.22}{0.1}\right)$$

$$\text{pH} = 4.04$$

- c. An enzyme has two disulfide bridges and no free cysteine side chains. After treatment of the protein with 2-mercaptoethanol in 8 M urea, the mercaptoethanol was removed and then disulfide bonds reformed in 8 M urea. The urea was then removed. What percentage of the native activity would you expect?

4 cysteines randomly or
gives 3×1 combination

$$33\%$$

- d. Splittase (15 μg) catalyzes the breakdown of 9 μmol of product formation per minute at room temperature. The molecular weight of the enzyme is 90,000 g/mol, the substrate 580 g/mol and the product 290 g/mol. What is the turnover number of splittase?

$$\frac{9 \times 10^{-6} \text{ mol /min}}{0.015 \times 10^{-3} / 90,000}$$

$$\text{Turnover number } 54,000 / \text{min}$$

- e. A buffer (pK = 5; 0.6 M) is adjusted to pH 5.2 with a negligible volume of NaOH. 1 L of the resulting solution is diluted with an additional 0.6 L of water. What is the new pH?

doesn't change ratio $\frac{\text{A}^-}{\text{HA}}$

$$\text{pH } 5.2$$

- h. a negligible volume of aldolase was added to 0.02 M fructose-1,6-diP and, at equilibrium, the concentration of fructose-1,6-diP was found to be 0.019. Calculate the equilibrium constant for the aldolase reaction:

$$K_{eq} = \frac{[0.001][0.001]}{[0.019]} = 5.26 \times 10^{-5} M$$

- i. How much iron in grams is contained in the average person's hemoglobin. You will need some of the following pieces of information. MW hemoglobin 64,000 g/mol; atomic weight of iron 56 g/mol; number of red cells in human blood 2.5×10^{18} ; volume of blood 7 L; concentration of hemoglobin in blood 0.16 g/mL

$$0.16 \text{ g/mL} \times 7000 \text{ mL} = 1120 \text{ g}$$

$$\frac{1120 \text{ g}}{64000 \text{ g/mol}} = 0.0175 \text{ moles}$$

$$\text{iron } 3.92 \text{ g}$$

$$\text{so } \frac{4}{1} \times 0.0175 \text{ moles} \times 56 \text{ g/mol}$$

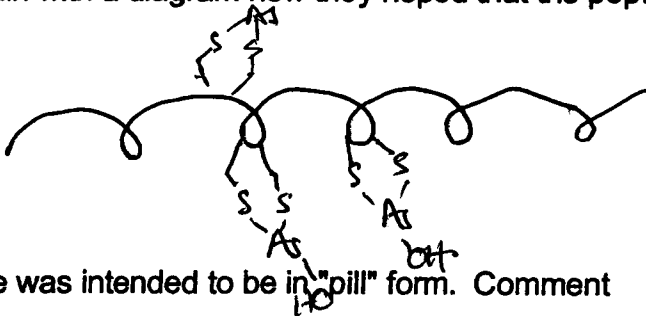
Question 9 (5 pts). This alpha helical peptide:

TRP-GLU-ALA-ALA-ALA-ARG-GLU-ALA-CYS-CYS-ALA-CYS-CYS-ARG-GLU-CYS-CYS-ALA-ARG-ALA

has been suggested to be an antidote to a poison discussed in class.

Poison = Arsenic (III) (2)

Briefly explain with a diagram how they hoped that the peptide would work:



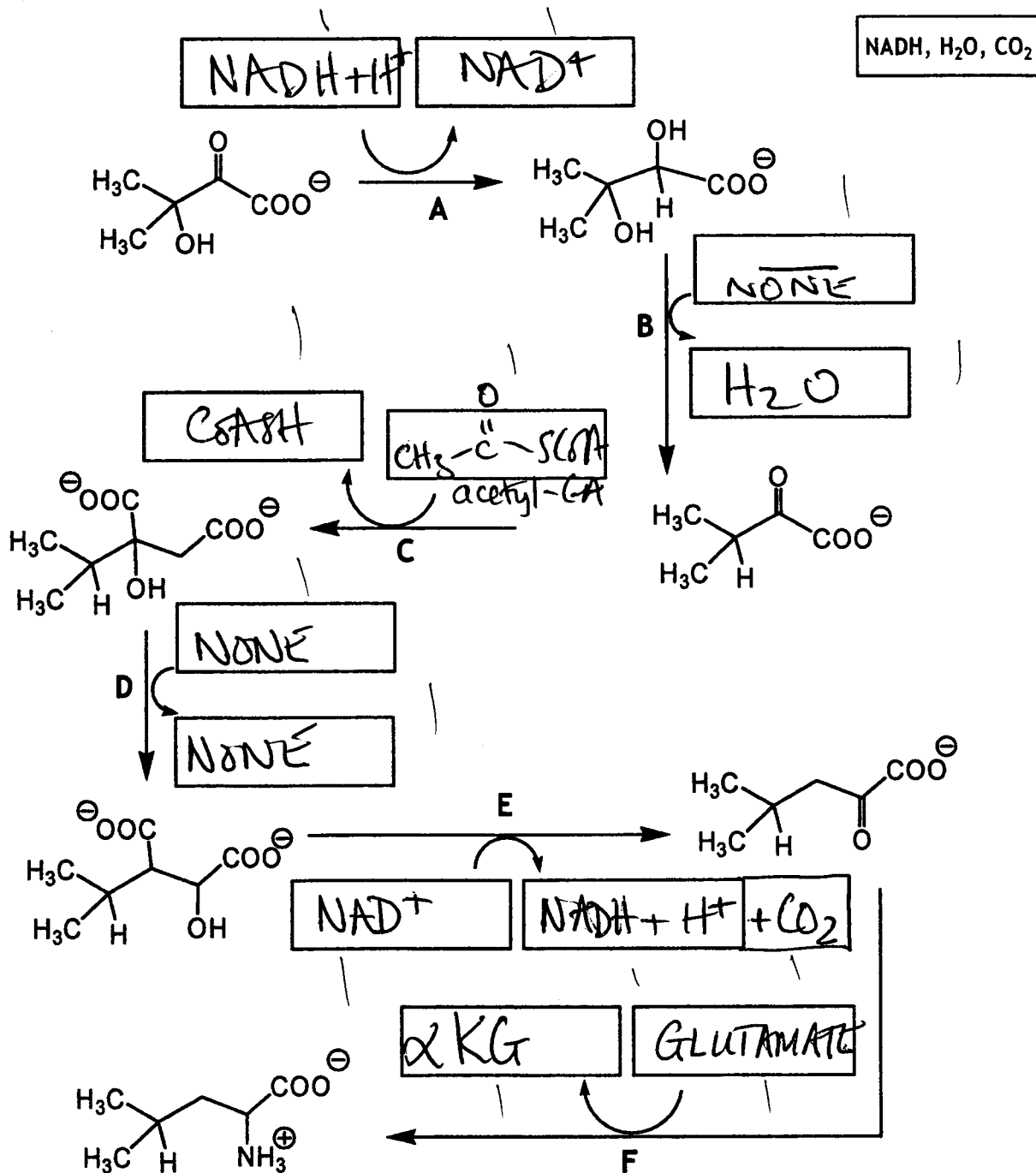
① The antidote was intended to be in "pill" form. Comment

Peptide likely to be hydrolyzed in stomach — NOT effective (?)

Question 10 (3 pts) Substrate concentrations of 2 and 10 mM for a fixed amount of enzyme give rates of 8 and 39 $\mu\text{mol/min}$. What is the most appropriate answer?

- a. the enzyme is allosteric
- b. the enzyme is saturated with substrate
- c. both substrate concentrations are well below the K_m
- d. the enzyme is limited by diffusion
- e. all of the above are false.

Question 11 (17 pts) The following is part of the biosynthesis pathway for LEUCINE. Reason by analogy to clearly indicate in the boxes every substrate and product missing for each reaction A-F. Don't put enzyme names - a hypothetical example for one box is shown at right). If nothing is needed in the box put "NONE".



What prosthetic group/cofactor would be expected for steps:

D (Fe/S) à la aconitase F pyridoxal phosphate (PLP)

Question 12 (6 pts.) In three words or less – what (in terms of mechanism or substrates) do these pairs of enzymes have in common

a. Phosphorylase and glyceraldehyde 3P-dehydrogenase

use P_i substrate

b. Fumarase and enolase

both remove H_2O

c. Phospholipase and chymotrypsin

H_2O as substrate

anything reasonable

B

Question 13 (3 pts) Circle a-f to show which compound or combinations of compounds is/are substrate(s) for liver alcohol dehydrogenase:

1= ethanol

2= methanol

3 = ethylene glycol

4= D-glucose

a. 1,2,3,4

b. 1,2,3


c. 1,2

d. 1

e. 3,4

f. 2,3

Question 14 (5 pts) In the following metabolic pathway A-F the enzymes are shown as E1-E5. Two strains of bacteria are identical except that strain 2 has double the amount of E4 compared to strain 1.



a. In strain 2 the rate of formation of F will (circle the appropriate answer)

decrease to 50% of strain 1

remain the same

double

cannot say

what will happen to the mass action ratio $[E]/[D]$

increase to 50% of strain 1

remain the same

double

cannot say

If this is a catabolic pathway - and E1 is an allosteric enzyme
- name a likely allosteric activator of E1

ADP / AMP

Question 15 (12 pts) Fill in the blanks with not more than 3 legible words.

- a. reactions that replenish TCA cycle intermediates are called anapleurotic
- b. This technique rapidly stops metabolism allowing mass mass action ratios to be determined freeze clamping
- c. Name an enzyme that is involved in thermogenesis in bumble bees PFK or
ELADIP - phosphate
- d. two transition metals in the electron transport chain Cu and Fe
- e. he won a Noble prize for his chemiosmotic theory Mitchell, Peter
- f. A compound useful in the diagnosis of Helicobacter pylori infections urea (¹³C labelled)
- g. what protein is at the center of every glycogen granule GLYCOGENIN
- h. enzyme responsible for activating glucose in glycogen synthesis UDP-glucose
pyrophosphorylase
- i. About 2% of sudden infant death is caused by a deficiency in this enzyme E₁ of FAO
medium chain acyl-CoA dth
- j. an amino acid without a chiral center GLYCINE
- k. every third amino acid in the collagen triple helix must be GLYCINE
- zzz. The word that best describes this exam OVER

good luck etc. etc.....